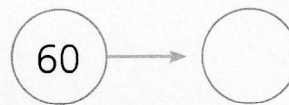
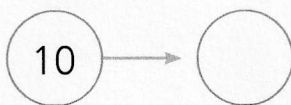
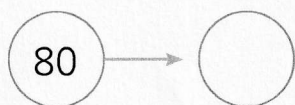
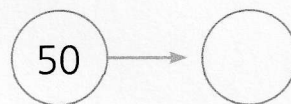
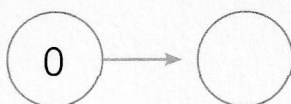
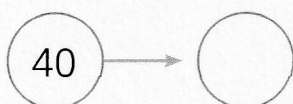
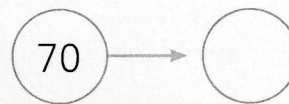
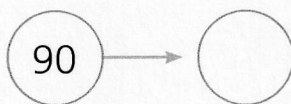
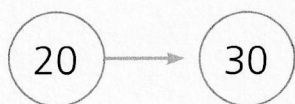
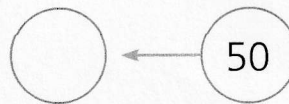
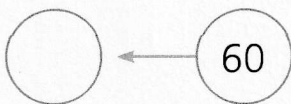
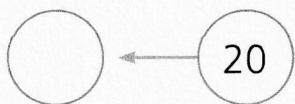
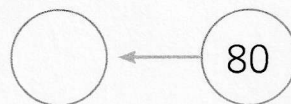
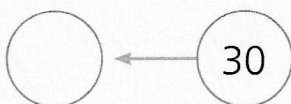
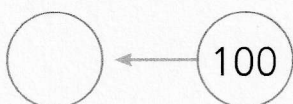
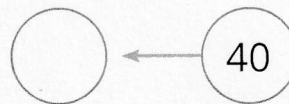
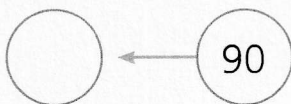
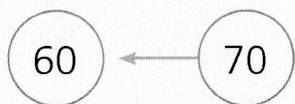


🌀 **Scrivi la decina successiva. Segui l'esempio.**



🌀 **Scrivi la decina precedente. Segui l'esempio.**



🌀 **Scrivi il numero mancante per arrivare a 100.**

..... + 70 = 100

20 + ..... = 100

..... + 40 = 100

..... + 30 = 100

..... + 90 = 100

..... + 80 = 100

50 + ..... = 100

10 + ..... = 100

..... + 0 = 100

100 + ..... = 100

60 + ..... = 100

NOME: .....

COGNOME: .....

DATA: .....

Contare in senso progressivo e regressivo e per salti di 2, 5, 10.